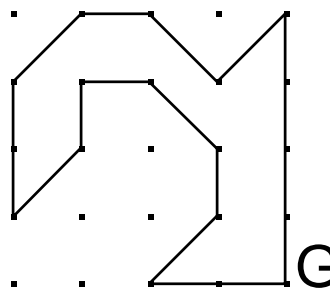
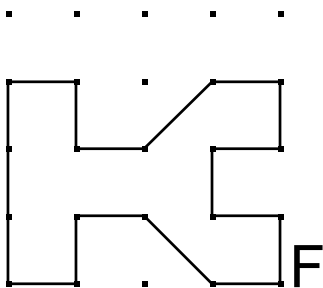
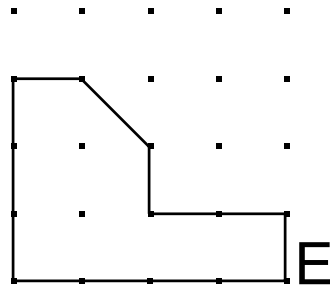
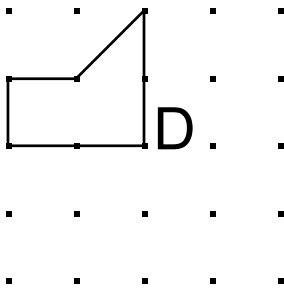
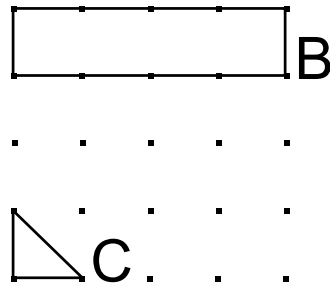
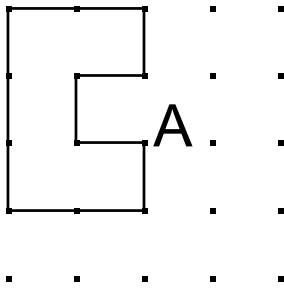




Considera que aquest quadradet té 1 unitat d'àrea.

Calcula l'àrea de les figures següents:



### Solució

A. 5 u    B. 4 u    C.  $\frac{1}{2}$  u    D.  $2 \frac{1}{2}$  u    E.  $7 \frac{1}{2}$  u

F. 8 u    G. 8 u

