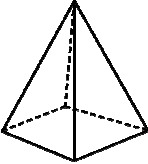
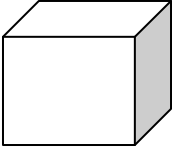
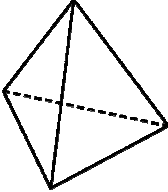
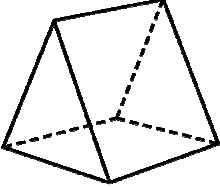

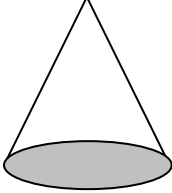
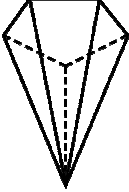

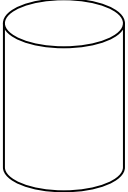
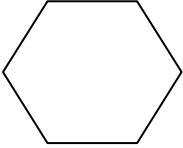
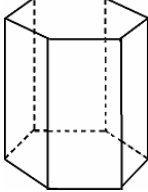
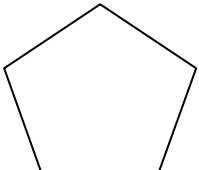


Teaching resources 7: **DOMINO 2**

Make 2 prints of this sheet, if you want a domino piece for each student, or one, to work in pairs. Cut out the discontinuous line.

			
<p>Who has a 3D shape with 6 squares surfaces?</p>	<p>Who has a 3D shape with 4 triangles?</p>	<p>Who has a 3D shape with 2 triangles and 3 rectangles?</p>	<p>Who has a 3D shape with one curved surface?</p>
			
<p>Who has a 3D shape with one curved surface and one flat surface?</p>	<p>Who has a 3D shape with one pentagon and 5 triangles?</p>	<p>Who has a 2D shape with 4 equal sides?</p>	<p>Who has a 3D shape with 1 curved surface and 2 flats surfaces?</p>
			
<p>Who has a 2D shape with 6 equals sides)</p>	<p>Who has a 3D shape with 2 hexagon and 6 rectangles?</p>	<p>Who has a 2D shape with 5 equal sides?</p>	<p>Who has a 3D shape with 4 triangles and 1 square?</p>